

# AIR FORCE SCHOOL BAGDOGRA

## SUBJECT: COMPUTER (CLASS II)

### SOLUTION OF CHAPTER 2 – AFTER DISCUSSION WITH CLASS

## EXERCISES



1. Bina's father wants to store data in his pen drive but he cannot find it. Bina has spotted it at the other end of the garden. Can you help Bina reach the pen drive without stepping on the grass?



2. Which of the following is an input device? Put a tick (✓) or a cross (X) in the boxes given below each picture.



### 3. Fill in the blanks with the correct words.

CPU                  Display                  keyboard                  mouse                  UPS

- a. A monitor is also called a Visual **Display** Unit.  
b. The **CPU** cabinet contains the Central Processing Unit.  
c. A **keyboard** has many buttons called keys.  
d. A **mouse** is a pointing device.  
e. A **UPS** keeps the computer in a working state for some time even after the electricity goes off.

### 4. Write T for the true statement and F for the false one.

- a. The CPU controls all the parts of a computer, except for the input devices.  
b. Speakers can be used to listen to music without disturbing others.  
c. A CD can store more data than a DVD.  
d. A pen drive can be easily carried in your pocket.  
e. Hard disks can be fixed or portable.

**F**  
**F**  
**F**  
**T**  
**T**

### 5. Choose the correct option.

- a. It is a part of a computer system  
i. Monitor      ii. CPU Cabinet      iii. Keyboard and Mouse      **iv. All of these**
- b. Which one is true about the CPU?  
i. Its full form is Central Processing Unit  
ii. It is the brain of the computer.  
iii. It controls all the other parts of a computer.  
**iv. All of the above**

c. Which one is an input device?

- i. Printer      ii. Speaker      **iii. Microphone**      iv. Headphones

d. Which of the following is not used to store data?

- i. CD      ii. DVD      iii. Pen Drive      **iv. UPS**

e. Which one is called a pointing device?

- i. Keyboard      **ii. Mouse**      iii. Printer      iv. Hard disk

## 6. Answer the following.

a. What are the four main parts of a computer?

KEYBOARD, MOUSE, MONITOR, CPU

b. What are input devices?

INPUT DEVICES ARE THE PARTS OF COMPUTER THAT HELPS TO FEED OR INPUT DATA FOR PROCESSING. EXAMPLE - MOUSE, KEYBOARD, SCANNER

c. Define output devices.

OUTPUT DEVICES ARE THE PARTS OF COMPUTER THAT PRODUCES OUTPUT / RESULT AFTER PROCESSING. EXAMPLE- MONITOR, SPEAKERS, PRINTER

d. List two uses of a mouse.

MOUSE IS USED TO CLICK AND POINT ITEMS LIKE ICON, FOLDERS, FILES ETC.

e. Mention two devices used to listen to recorded sound or music.

SPEAKERS, HEADPHONES

f. Name any three devices used to store information permanently.

CD-R, DVD-R, ROM (READ ONLY MEMORY) (R- RECORDABLE)

# WORKSHEET—1


Chapters 1 and 2

Maximum Marks: 15

1. Search for two input and two output devices in the grid given below. (4)

Keyboard                      Mouse                      Printer                      Headphones

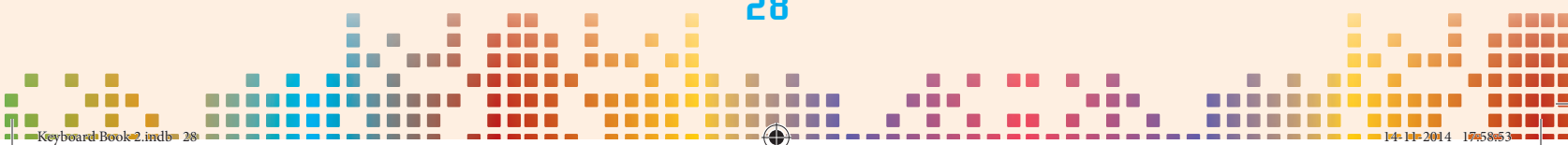
S	C	W	F	H	Y	J	N	B	F
X	D	P	R	I	N	T	E	R	D
E	E	J	S	Y	J	P	S	D	S
W	R	T	G	T	U	T	A	E	M
F	H	R	F	R	Y	E	W	V	O
K	E	Y	B	O	A	R	D	C	U
G	S	E	A	G	D	S	C	X	S
T	A	W	S	D	E	A	G	G	E
Y	W	A	W	S	R	W	H	H	D
H	E	A	D	P	H	O	N	E	S





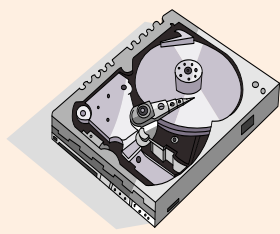

2. Who am I? (5)

- a. I am used to store data and can easily be carried in a pocket .....
- b. I am used to take a printout .....
- c. I am used to record sound .....
- d. I control all the other parts of a computer .....
- e. I am an input device. I am also known as a pointing device .....

3. Label the four parts of a computer system. (4)



4. Neha has drawn the figures of some devices and labelled them. Check if she has labelled all of them correctly. Put a tick (✓) for the correct label and a cross (✗) for the wrong one in the boxes below. (2)

A	B	C	D
			
CPU	Speaker	Pen Drive	Monitor
<input type="checkbox"/>	<input type="checkbox"/>	<input type="checkbox"/>	<input type="checkbox"/>

Write the correct labels here:

- A .....
- B .....
- C .....
- D .....

